

AP EUROPEAN HISTORY

EUROPE MAP TEST

The test will be matching and will include the following countries and bodies of water:

Albania	<i>Dnieper River</i>	Macedonia (FYROM)	Russia
<i>Atlantic Ocean</i>	<i>Elbe River</i>	<i>Mediterranean Sea</i>	<i>Seine River</i>
Austria	Estonia	Moldova	Serbia
<i>Baltic Sea</i>	Finland	Montenegro	Slovakia
Belarus	France	Netherlands	Slovenia
Belgium	Germany	<i>North Sea</i>	Spain
<i>Black Sea</i>	Greece	Norway	Sweden
Bosnia	Hungary	<i>Oder River</i>	Switzerland
Bulgaria	Iceland	<i>Po River</i>	<i>Tagus (Tajo) River</i>
Croatia	Ireland	Poland	Turkey
Czech Republic	Italy	Portugal	Ukraine
<i>Danube River</i>	Latvia	<i>Rhine River</i>	United Kingdom
Denmark	Lithuania	Romania	<i>Vistula (Wista) River</i>
	<i>Loire River</i>		<i>Volga River</i>

Attached to this sheet are a filled-in map and a blank map that you may use to study for the test. As well, there are several websites, which offer good interactive maps of Europe that can help you prepare for the test. They are:

<http://www.mapmsg.com/games/statetris/europe/>

Statris (map Tetris game)

http://www.sheppardsoftware.com/European_Geography.htm

Great game site with levels of competition

http://www.yourchildlearns.com/europe_map.htm


Great interactive map, which gives the name of the country and its capital when the cursor is placed on a country

http://www.yourchildlearns.com/puzzle_eur.htm


Map of Europe puzzle game that you have to download to your hard drive to play. You are given country "pieces" which you have to place in their correct location.

EUROPE

MILES

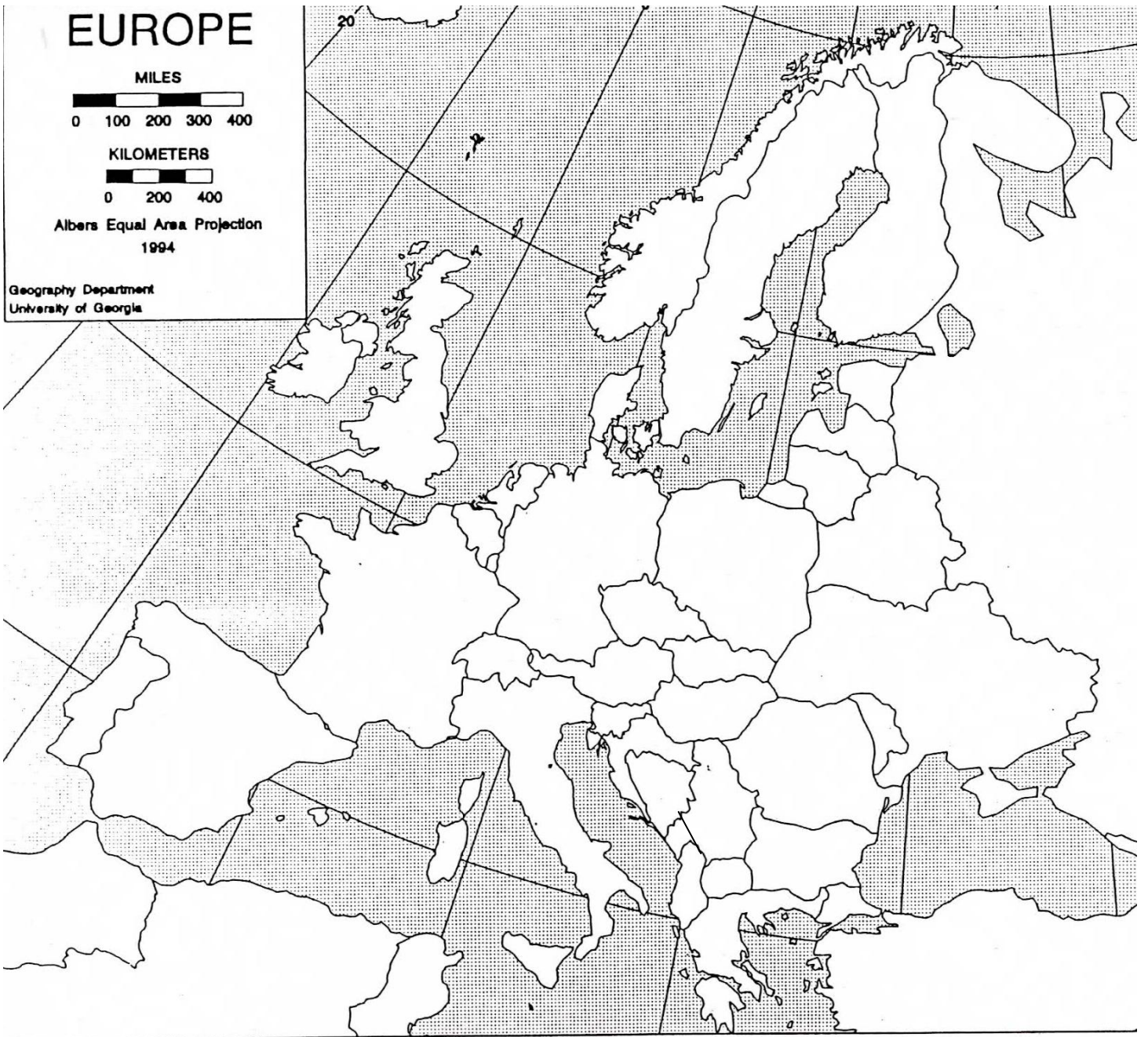


KILOMETERS



Albers Equal Area Projection
1994

Geography Department
University of Georgia



<http://www.geographyguy.com/geo222/eubm.htm>